

Good morning Year One! 😊

It is not necessary to print out all of these slides so please read them through carefully so you can decide exactly which are needed as a paper copy.

Thank you.

Session 2


My 0 to 30 Number Line



1	2	3	4	5	6	7	8	9	10
11	12	13	14	15	16	17	18	19	20
21	22	23	24	25	26	27	28	29	30
31	32	33	34	35	36	37	38	39	40
41	42	43	44	45	46	47	48	49	50
51	52	53	54	55	56	57	58	59	60
61	62	63	64	65	66	67	68	69	70
71	72	73	74	75	76	77	78	79	80
81	82	83	84	85	86	87	88	89	90
91	92	93	94	95	96	97	98	99	100


(If needed)

OMS: This is the answer



Can you think of the questions?


e.g. $1 + 9 = 10$



My 0 to 30 Number Line




OMS: This is the answer



Can you think of the questions?


e.g. $11 + 9 = 20$



My 0 to 30 Number Line




OMS: This is the answer




Can you think of the questions?

e.g. $11 + 19 = 30$



OMS: This is the answer



Can you think of the questions?

e.g. $19 + 31 = 50$




Let's use your super addition skills to explore a challenge today.

Choose the challenge for your group.

As always, if that one is too tricky try the one for the group before, or if it is too easy, the one for the group after.



WALT: Recognise family addition facts.



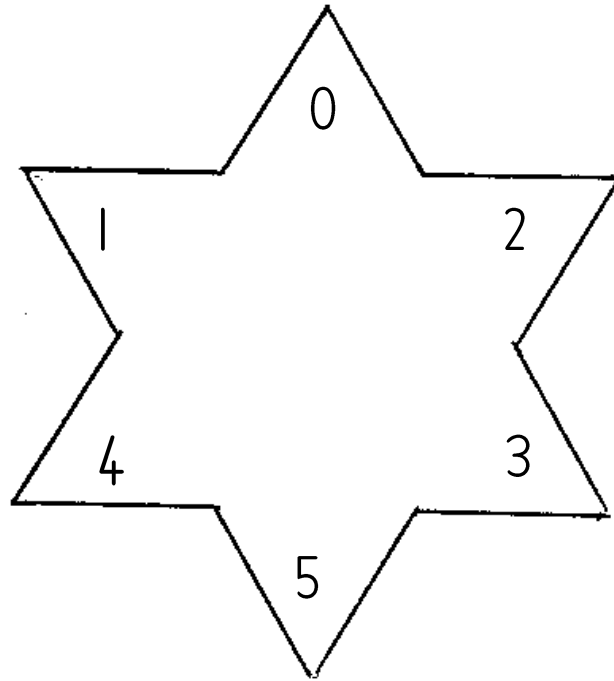
5

7

10

3

8



Use any of the digits in the star, to make a number sentence which totals one of the numbers in the boxes.



WALT: Recognise family addition facts.



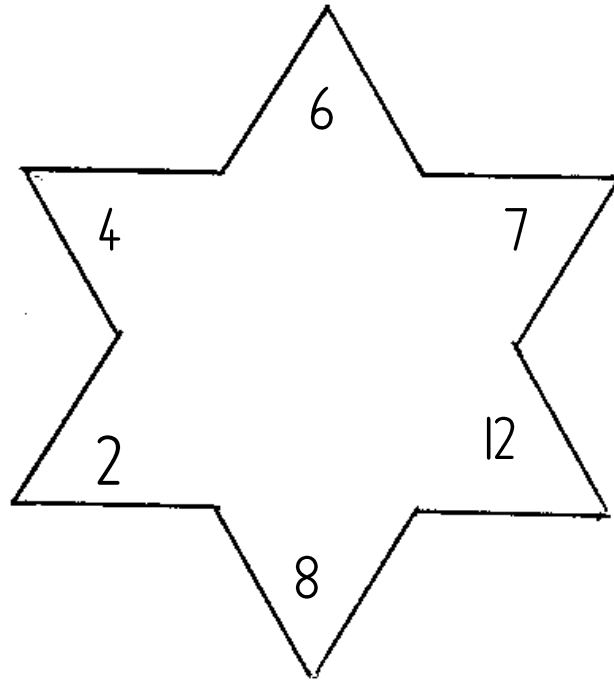
12

13

10


20

9



Use any of the digits in the star, to make a number sentence which totals one of the numbers in the boxes.

WALT: Recognise family addition facts.



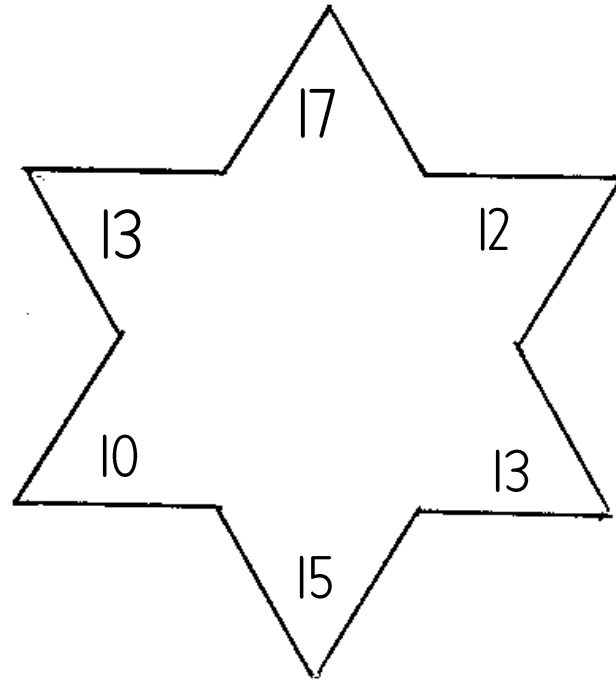

28

26

22

27

30



Use any of the digits in the star, to make a number sentence which totals one of the numbers in the boxes.

Plenary:

Play 'Hit the button-times tables'. Choose the 2 or 5 times table.

<https://www.topmarks.co.uk/maths-games/hit-the-button>